

# Volume of a Rectangular Prism: Worksheet 3.1

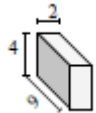
Name ..... Date ..... Score .....

Find the volume of each of the rectangular prisms in cubic cm.

1.



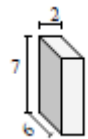
2.



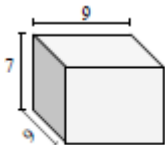
3.



4.



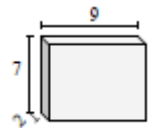
5.



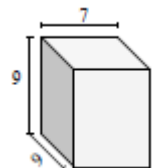
6.



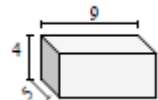
7.



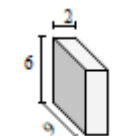
8.



9.



10.



## Solutions: Worksheet 3.1

1. Volume of rectangular prism = 60 cu cm
2. Volume of rectangular prism = 72 cu cm
3. Volume of rectangular prism = 56 cu cm
4. Volume of rectangular prism = 84 cu cm
5. Volume of rectangular prism = 567 cu cm
6. Volume of rectangular prism = 8 cu cm
7. Volume of rectangular prism = 126 cu cm
8. Volume of rectangular prism = 567 cu cm
9. Volume of rectangular prism = 180 cu cm
10. Volume of rectangular prism = 108 cu cm

