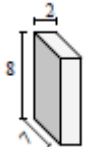


Volume of a Rectangular Prism: Worksheet 3.3

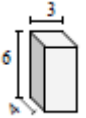
Name Date Score

Find the volume of each of the rectangular prisms in cubic cm.

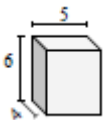
1.



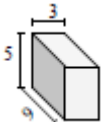
2.



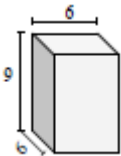
3.



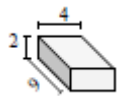
4.



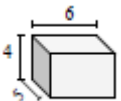
5.



6.



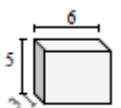
7.



8.

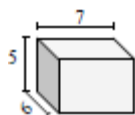


9.



Solutions: Worksheet 3.3

10.



1. Volume of rectangular prism = 112 cu cm
2. Volume of rectangular prism = 72 cu cm
3. Volume of rectangular prism = 120 cu cm
4. Volume of rectangular prism = 135 cu cm
5. Volume of rectangular prism = 324 cu cm
6. Volume of rectangular prism = 72 cu cm
7. Volume of rectangular prism = 120 cu cm
8. Volume of rectangular prism = 72 cu cm
9. Volume of rectangular prism = 90 cu cm
10. Volume of rectangular prism = 210 cu cm

