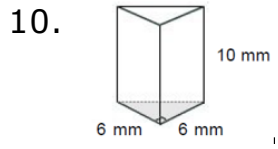
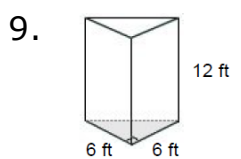
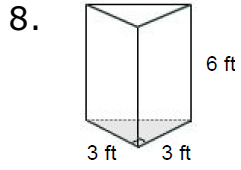
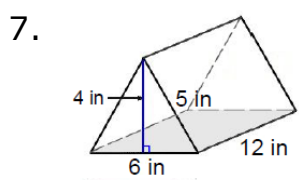
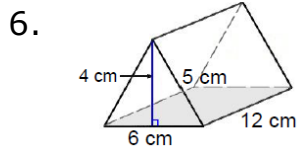
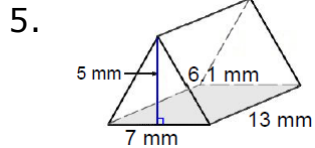
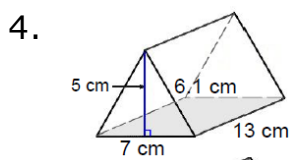
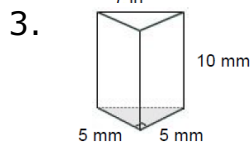
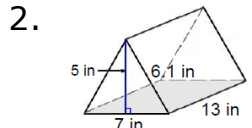
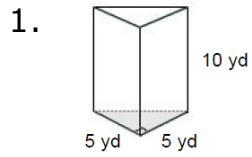


# Volume of a Triangular Prism: Worksheet 9.2

Name ..... Date ..... Score .....

Find the volume of the following triangular prisms.



## Solutions: Worksheet 9.2

1. Volume of the triangular prism = 125 cu yd
2. Volume of the triangular prism = 227.5 cu in
3. Volume of the triangular prism = 125 cu mm
4. Volume of the triangular prism = 227.5 cu cm
5. Volume of the triangular prism = 227.5 cu mm
6. Volume of the triangular prism = 144 cu cm
7. Volume of the triangular prism = 144 cu in
8. Volume of the triangular prism = 27 cu ft
9. Volume of the triangular prism = 216 cu ft
10. Volume of the triangular prism = 180 cu mm

