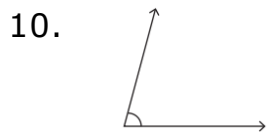
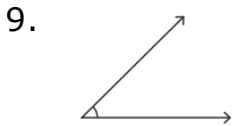
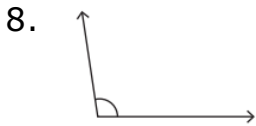
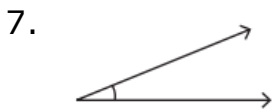
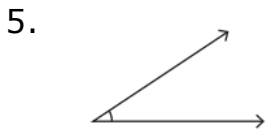
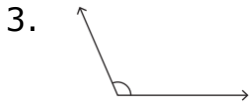
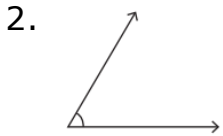
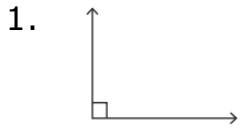


Acute, obtuse, and right angles: Worksheet 2.1

Name Date Score

Classify each angle as acute, obtuse, right or straight



Solutions: Worksheet 2.1

1. Right angle
2. Acute angle
3. Obtuse angle
4. Obtuse angle
5. Acute angle
6. Straight angle
7. Acute angle
8. Obtuse angle
9. Acute angle
10. Acute angle

