

Acute, obtuse, and right angles: Worksheet 2.2

Name Date Score

Classify each angle as acute, obtuse, right or straight

1.



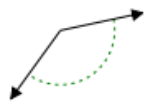
2.



3.



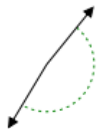
4.



5.



6.



7.



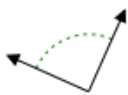
8.



9.



10.



Solutions: Worksheet 2.2

1. Obtuse angle
2. Obtuse angle
3. Right angle
4. Obtuse angle
5. Acute angle
6. Obtuse angle
7. Right angle
8. Acute angle
9. Obtuse angle
10. Right angle

