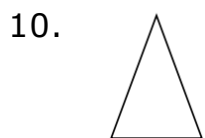
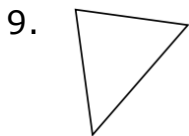
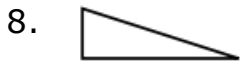
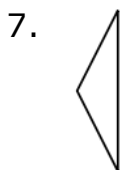
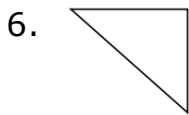
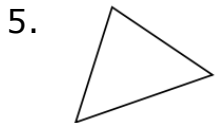
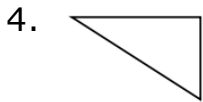
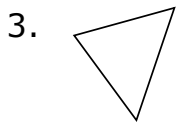
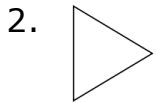
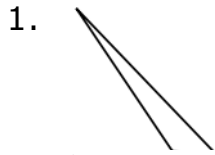


Acute, Obtuse, and Right Triangles: Worksheet 5.2

Name Date Score

Identify each of the triangles as acute, obtuse or right triangles.



Solutions: Worksheet 5.2

1. Obtuse triangle
2. Acute triangle
3. Acute triangle
4. Right triangle
5. Acute triangle
6. Right triangle
7. Obtuse triangle
8. Right triangle
9. Acute triangle
10. Acute triangle

