

Acute, Obtuse, and Right Triangles: Worksheet 5.3

Name Date Score

Identify each of the triangles as acute, obtuse or right triangles.

1.



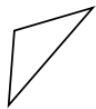
2.



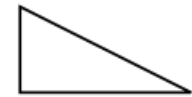
3.



4.



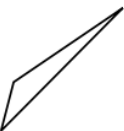
5.



6.



7.



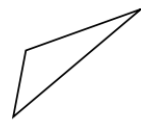
8.



9.



10.



Solutions: Worksheet 5.3

1. Right triangle
2. Right triangle
3. Acute triangle
4. Obtuse triangle
5. Right triangle
6. Acute triangle
7. Obtuse triangle
8. Acute triangle
9. Right triangle
10. Obtuse triangle

