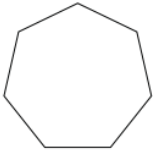


Naming polygons: Worksheet 8.1

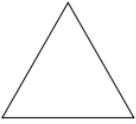
Name Date Score

Name the following polygons based on their number of sides.

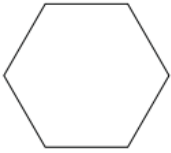
1.



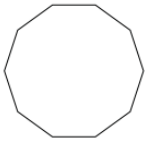
2.



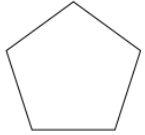
3.




4.



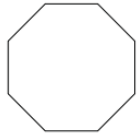
5.



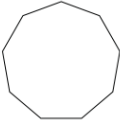
6.




7.



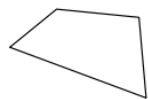
8.



9.



10.



Solutions: Worksheet 8.1

1. Heptagon
2. Triangle
3. Hexagon
4. Decagon
5. Pentagon
6. Square
7. Octagon
8. Nonagon
9. Trapezium
10. Quadrilateral

