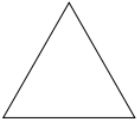


# Naming polygons: Worksheet 8.2

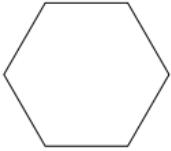
Name ..... Date ..... Score .....

Name the following polygons based on their number of sides.

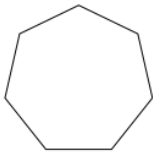
1.



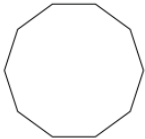
2.




3.



4.



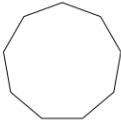
5.



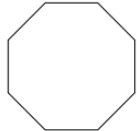
6.



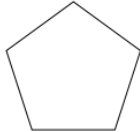
7.



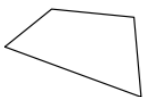
8.



9.



10.



## Solutions: Worksheet 8.2

1. Triangle
2. Hexagon
3. Heptagon
4. Decagon
5. Trapezium
6. Parallelogram
7. Nonagon
8. Octagon
9. Pentagon
10. Quadrilateral

