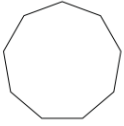


Naming polygons: Worksheet 8.3

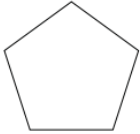
Name Date Score

Name the following polygons based on their number of sides.

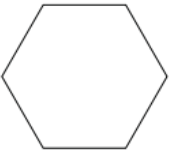
1.



2.



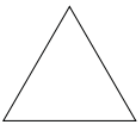
3.



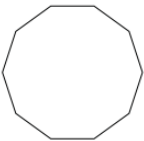
4.



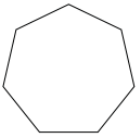
5.



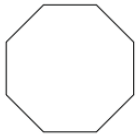
6.




7.



8.



9.



10.



Solutions: Worksheet 8.3

1. Nonagon
2. Pentagon
3. Hexagon
4. Rectangle
5. Triangle
6. Decagon
7. Heptagon
8. Octagon
9. Trapezium
10. Pentagon

