

## Plotting a point in the coordinate plane: Worksheet 4.2

Name ..... Date ..... Score .....

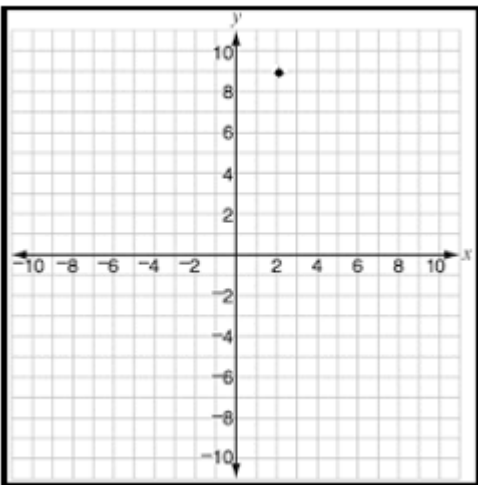
Plot the following points in the coordinate plane

1.  $(2, 9)$
2.  $(8, -5)$
3.  $(-5, -6)$
4.  $(-1, 4)$
5.  $(7, 6)$
6.  $(-3, -7)$
7.  $(5, -8)$
8.  $(7, -6)$
9.  $(-9, 5)$
10.  $(8, 8)$

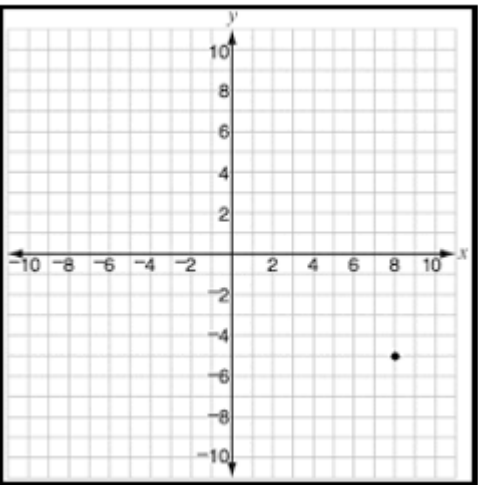


## Solutions: Worksheet 4.2

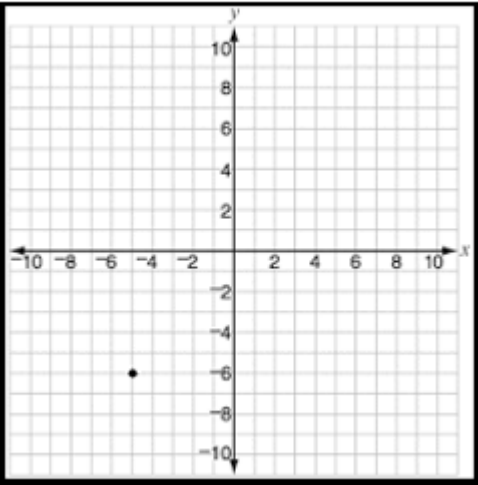
1.  $(2, 9)$



2.  $(8, -5)$



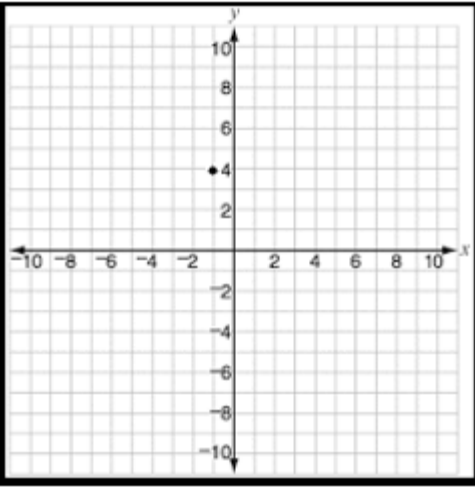
3.  $(-5, -6)$



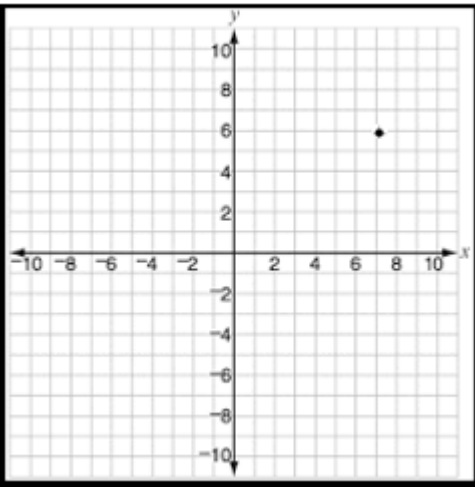
4.  $(-1, 4)$



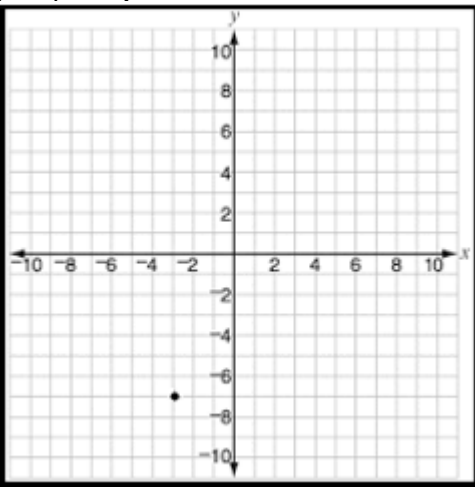
## Solutions: Worksheet 4.2



5.  $(7, 6)$



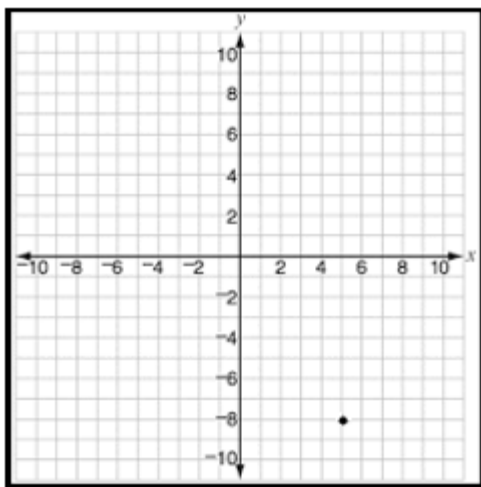
6.  $(-3, -7)$



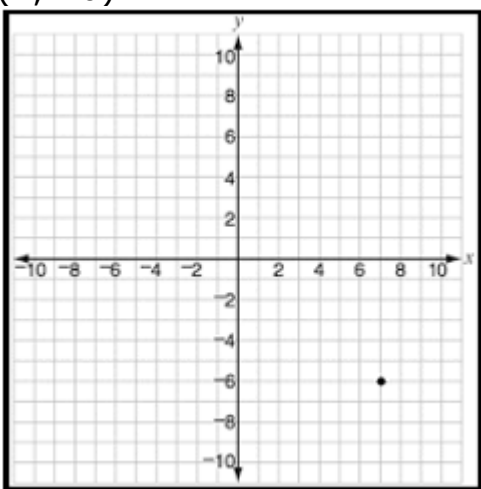
7.  $(5, -8)$



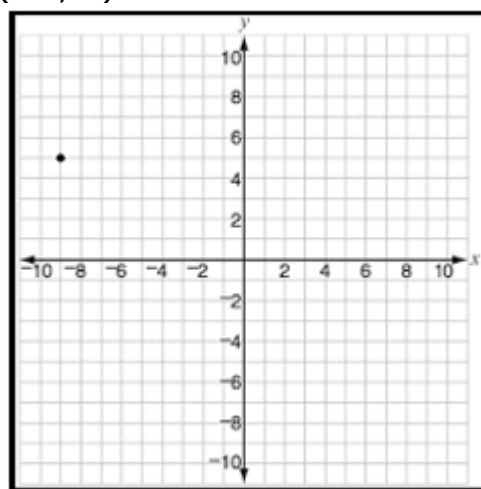
## Solutions: Worksheet 4.2



8.  $(7, -6)$



9.  $(-9, 5)$



10.  $(8, 8)$



## Solutions: Worksheet 4.2

