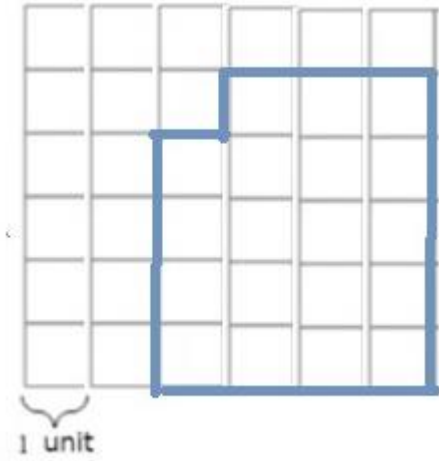


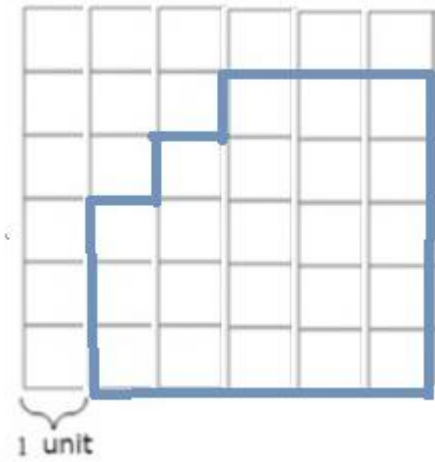
Perimeter and area on a grid: Worksheet 4.2

Name Date Score

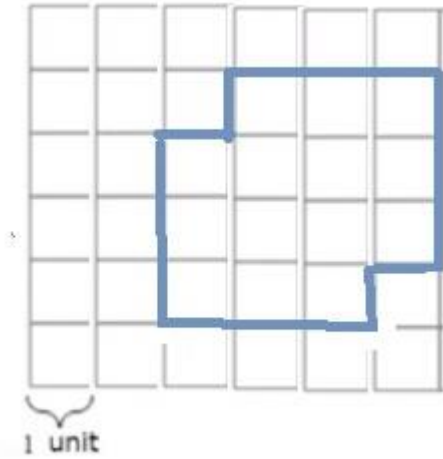
1. Find the perimeter of the shape on the grid.



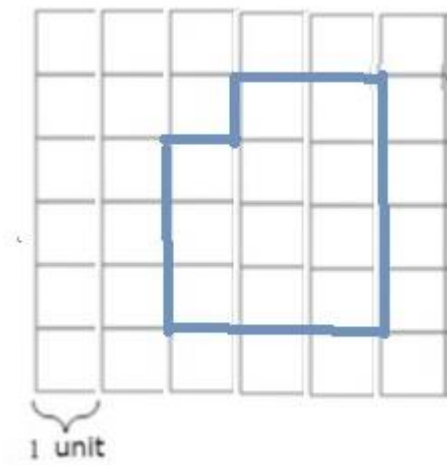
2. Find the perimeter of the shape on the grid.



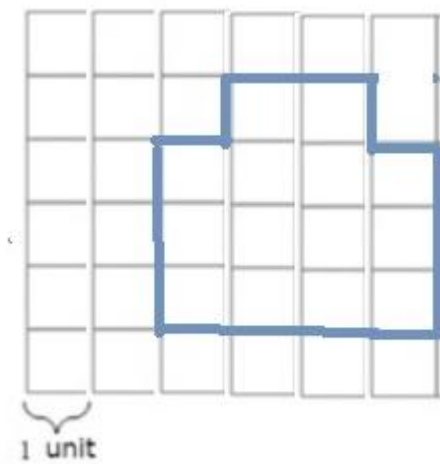
6. Find the area of the shape on the grid.



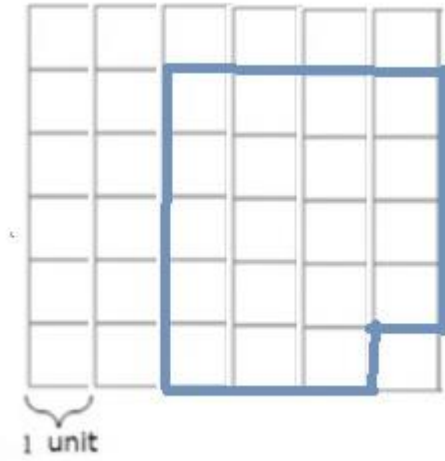
7. Find the area of the shape on the grid.



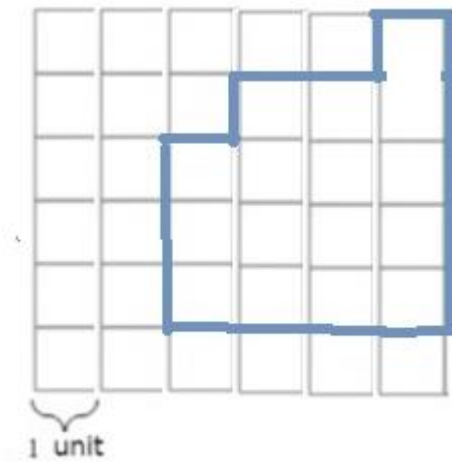
8. Find the area of the shape on the grid.



9. Find the area of the shape on the grid.



10. Find the area of the shape on the grid.



Solutions: Worksheet 4.2

1. 18 units
2. 20 units
3. 20 units
4. 20 units
5. 16 units
6. 14 square units
7. 11 square units
8. 14 square units
9. 19 square units
10. 16 square units

