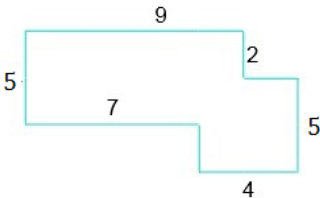


Perimeter of a polygon: Worksheet 1.3

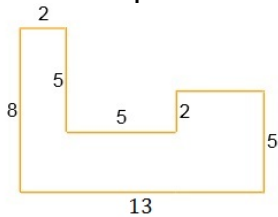
Name Date Score

1. If the length of side of a regular polygon of 7 sides is 9 m, then find its perimeter.
2. If the side lengths of a polygon are 8 cm, 8 cm, 10 cm, 10cm, 12 cm, what is its perimeter?
3. If the length of side of a regular polygon of 11 sides is 12 units, then find its perimeter.
4. If the side lengths of a polygon are 10 cm, 10 cm, 11 cm, 11cm, 12 cm, 15 cm what is its perimeter?
5. If the length of side of a regular polygon of 12 sides is 15 cm, then find its perimeter.
6. If the side lengths of a polygon are 11 m, 11 m, 13 m, 13 m, 15 m, 15 m what is its perimeter?
7. If the length of side of a regular polygon of 12 sides is 7 ft, then find its perimeter.

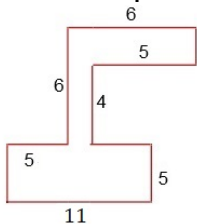
8. Find the perimeter of the following polygon.



9. Find the perimeter of the following polygon.



10. Find the perimeter of the following polygon.



Solutions: Worksheet 1.3

1. 63 m
2. 48 cm
3. 132 units
4. 69 cm
5. 180 cm
6. 78 m
7. 84 ft
8. 36 units
9. 46 units
10. 54 units

