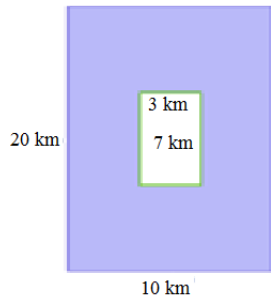


Area between two rectangles: Worksheet 10.1

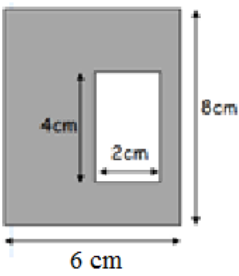
Name Date Score

Find the area between the following pairs of rectangles.

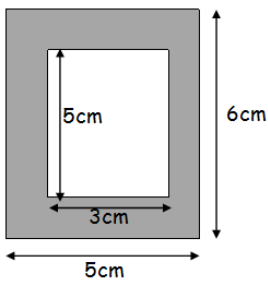
1.



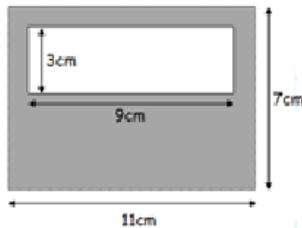
2.



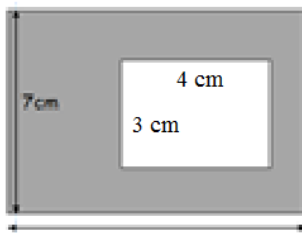
3.



4.

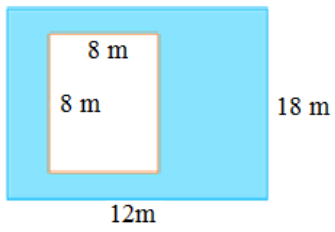


5.

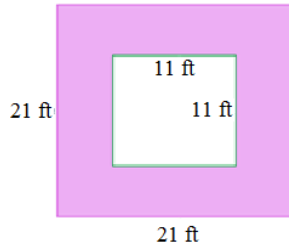


Solutions: Worksheet 10.1

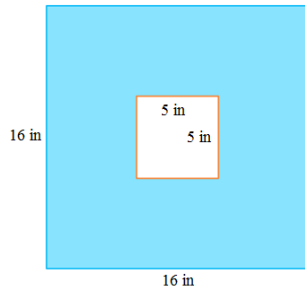
6.



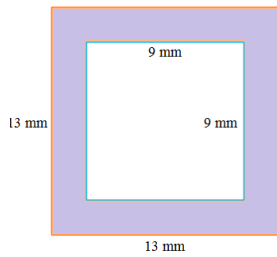
7.



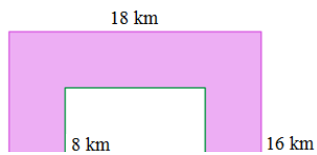
8.



9.



10.



Solutions: Worksheet 10.1

1. Area between rectangles = 179 square km
2. Area between rectangles = 40 square cm
3. Area between rectangles = 15 square cm
4. Area between rectangles = 50 square cm
5. Area between rectangles = 58 square cm
6. Area between rectangles = 152 square m
7. Area between rectangles = 320 square ft
8. Area between rectangles = 231 square in
9. Area between rectangles = 88 square mm
10. Area between rectangles = 208 square km

