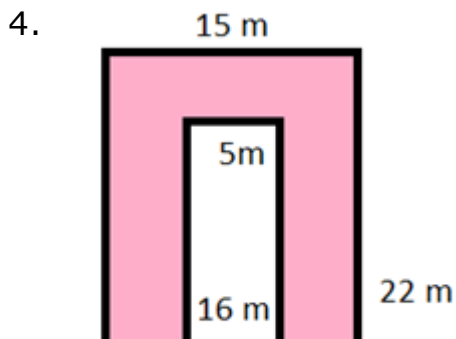
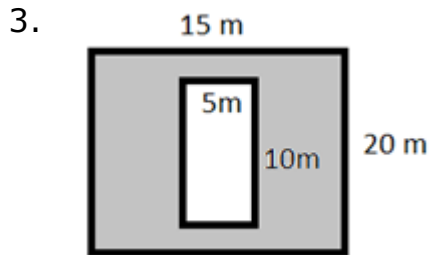
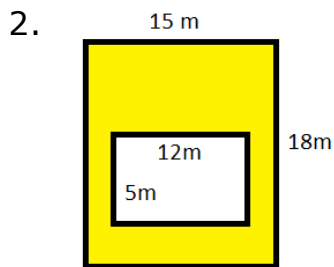
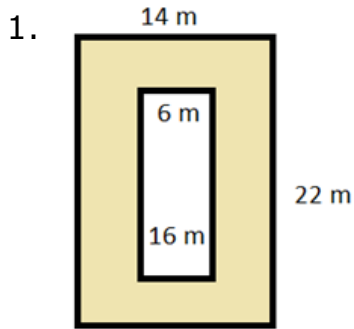


Area between two rectangles: Worksheet 10.2

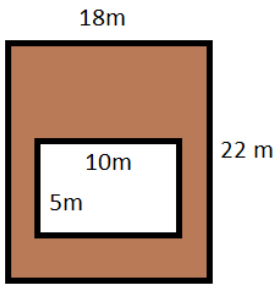
Name Date Score

Find the area between the following pairs of rectangles.

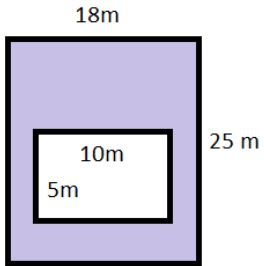


Solutions: Worksheet 10.2

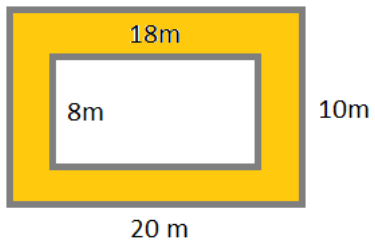
5.



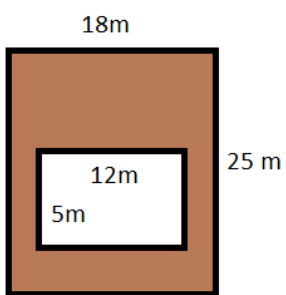
6.



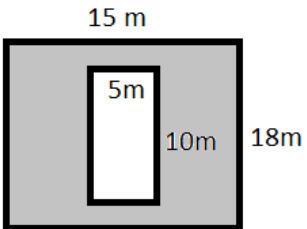
7.




8.



9.



10.



Solutions: Worksheet 10.2

Solutions

1. Area between rectangles = 212 square m
2. Area between rectangles = 210 square m
3. Area between rectangles = 250 square m
4. Area between rectangles = 250 square m
5. Area between rectangles = 346 square m
6. Area between rectangles = 400 square m
7. Area between rectangles = 56 square m
8. Area between rectangles = 390 square m
9. Area between rectangles = 220 square m
10. Area between rectangles = 106 square m

