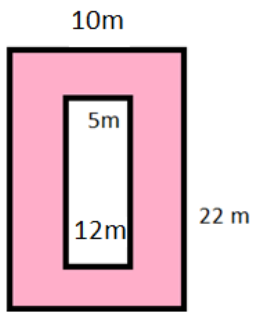


Area between two rectangles: Worksheet 10.3

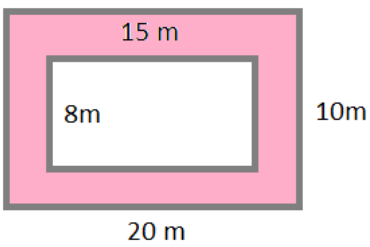
Name Date Score

Find the area between the following pairs of rectangles.

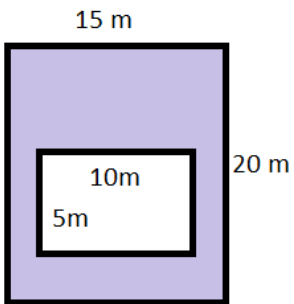
1.



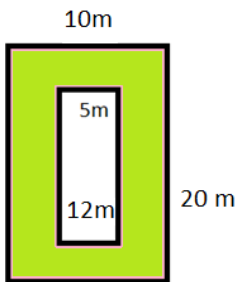
2.



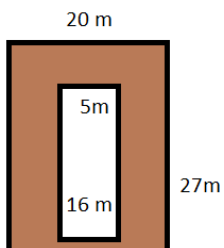
3.



4.

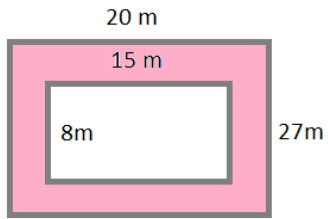


5.

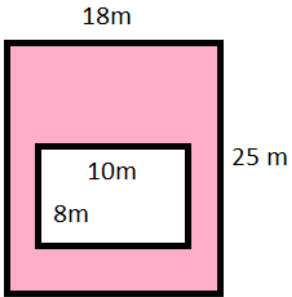


Solutions: Worksheet 10.3

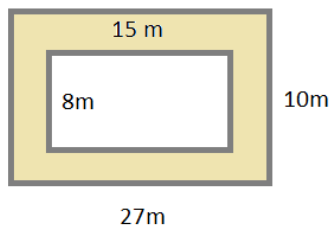
6.



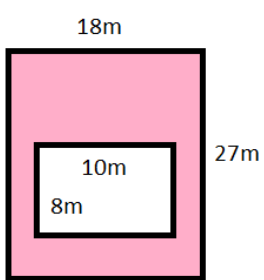
7.



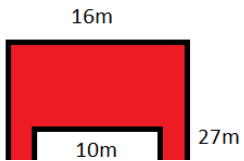
8.



9.



10.



Solutions: Worksheet 10.3

1. Area between rectangles = 160 square m
2. Area between rectangles = 80 square m
3. Area between rectangles = 250 square m
4. Area between rectangles = 140 square m
5. Area between rectangles = 460 square m
6. Area between rectangles = 450 square m
7. Area between rectangles = 370 square m
8. Area between rectangles = 150 square m
9. Area between rectangles = 406 square m
10. Area between rectangles = 352 square m

