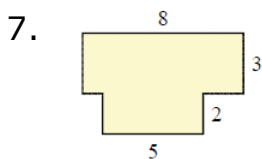
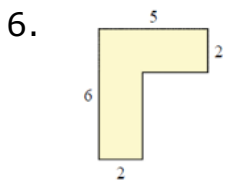
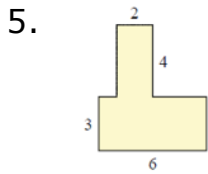
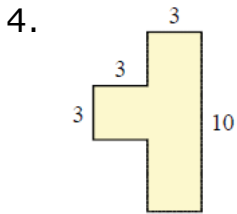
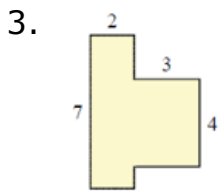
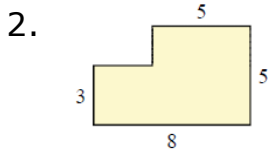
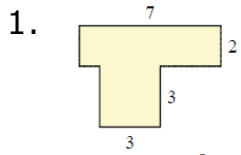


Area of a piecewise rectangular figure: Worksheet 9.1

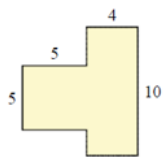
Name Date Score

Find the area of each piecewise rectangular figure. All measurements are in mm.

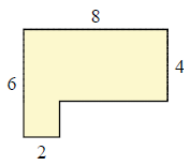


Solutions: Worksheet 9.1

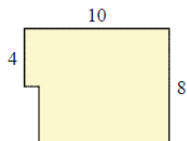
8.



9.



10.



Solutions

1. Area = 23 square mm

2. Area = 34 square mm

3. Area = 26 square mm

4. Area = 39 square mm

5. Area = 26 square mm

6. Area = 18 square mm

7. Area = 34 square mm

8. Area = 65 square mm

9. Area = 76 square mm



Solutions: Worksheet 9.1

10. Area = 23 square mm

