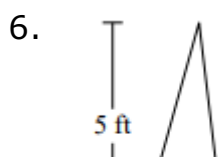
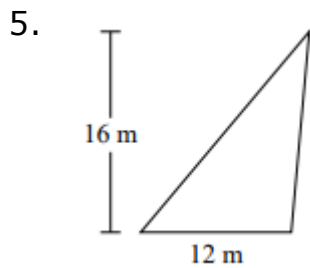
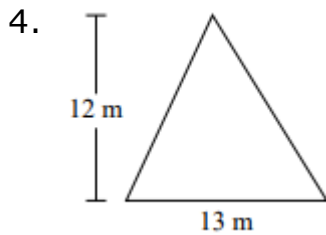
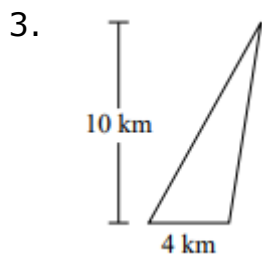
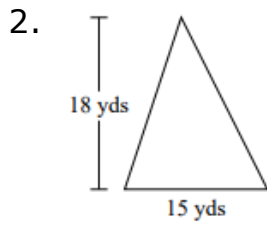
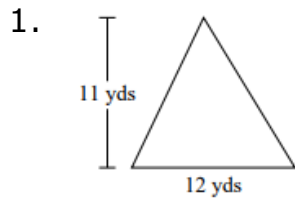


Area of a triangle: Worksheet 13.2

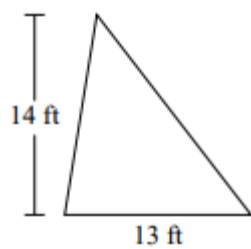
Name Date Score

Find the area of each triangle.

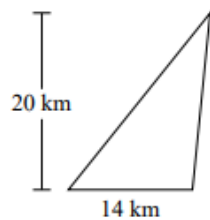


Solutions: Worksheet 13.2

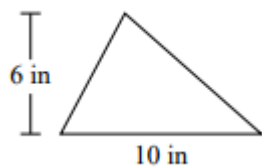
7.



8.



9.



10.



Solutions: Worksheet 13.2

1. Area of triangle = 66 square yd.
2. Area of triangle = 135 square yd.
3. Area of triangle = 20 square km.
4. Area of triangle = 78 square m.
5. Area of triangle = 96 square m.
6. Area of triangle = 5 square ft.
7. Area of triangle = 91 square ft.
8. Area of triangle = 140 square km.
9. Area of triangle = 30 square in.
10. Area of triangle = 55 square yd.

