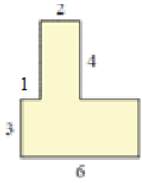


Finding the missing length in a figure: Worksheet 2.3

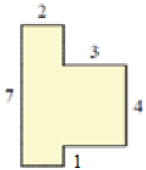
Name Date Score

Find the missing length(s) in the following figures

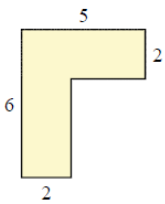
1.



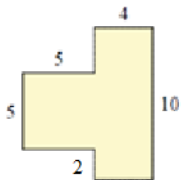
2.



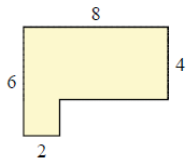
3.



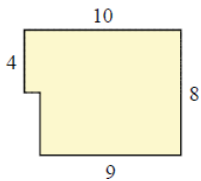
4.



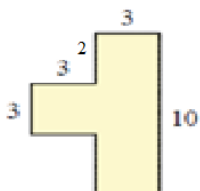
5.



6.

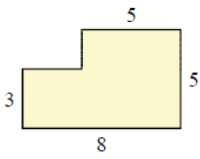


7.

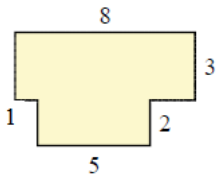


Solutions: Worksheet 2.3

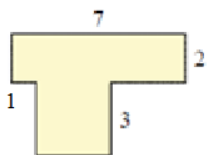
8.



9.

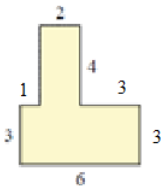


10.

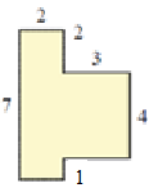


Solutions

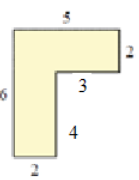
1.



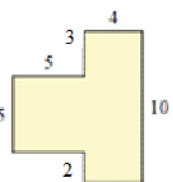
2.



3.

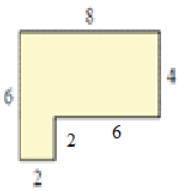


4.

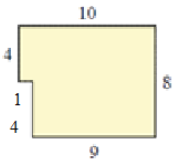


Solutions: Worksheet 2.3

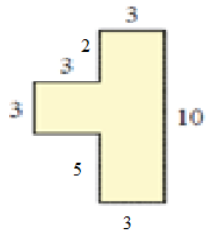
5.



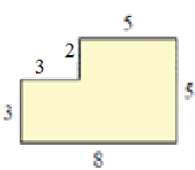
6.



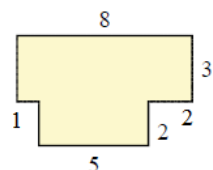
7.



8.



9.



10.

