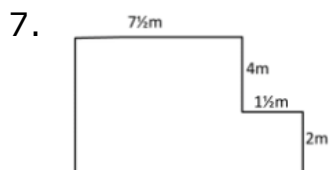
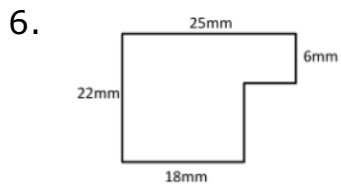
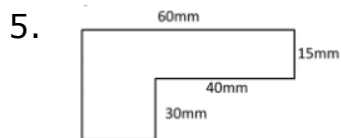
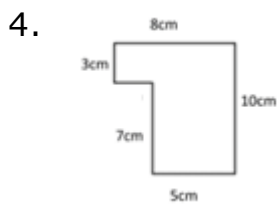
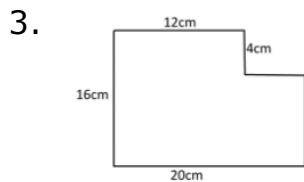
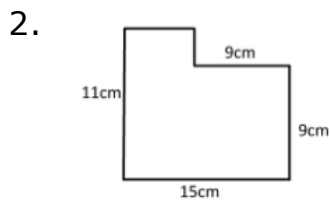
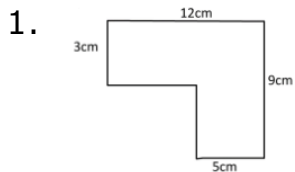


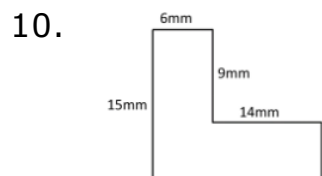
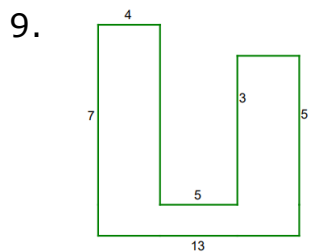
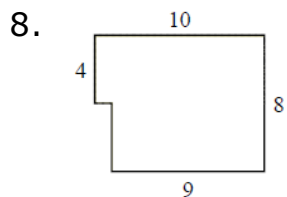
Perimeter of a piecewise rectangular figure: Worksheet 3.1

Name Date Score

Find the perimeters of the following figures. Notice that some lengths are not given. Assume that all intersecting sides meet at right angles.



Solutions: Worksheet 3.1



Solutions

1. Perimeter $P = 42$ cm
2. Perimeter $P = 52$ cm
3. Perimeter $P = 72$ cm
4. Perimeter $P = 36$ cm
5. Perimeter $P = 210$ mm
6. Perimeter $P = 94$ mm
7. Perimeter $P = 30$ m
8. Perimeter $P = 36$ units

Solutions: Worksheet 3.1

9. Perimeter $P = 46$ units
10. Perimeter $P = 70$ mm

